


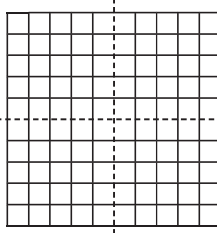
6 Write these numbers in the place value chart:

	Thousands	Hundreds	Tens	Ones	Tenths	Hundredths
a 4 tens, 3 ones and 7 tenths					•	
b 8 hundreds, 9 tens, 3 ones, 5 tenths and 3 hundredths					•	
c 9 ones and 7 tenths					•	
d 8 hundreds, 6 tenths and 4 hundredths			0	0	•	
e 5 ones, 2 tenths and 8 hundredths					•	

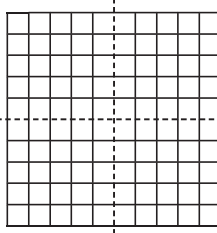
7 Shade the following fractions and fill in the missing information:

a 

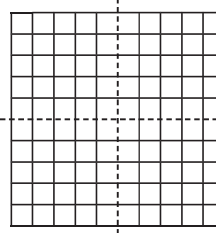
$\frac{1}{4}$	0.	%
---------------	----	---

b 

$\frac{1}{2}$	0.	%
---------------	----	---

c 

$\frac{3}{4}$	0.	%
---------------	----	---

d 

$\frac{4}{4}$	.	%
---------------	---	---

8 Answer the following:

- a A sale offers 25% off an item costing \$100. What is the price reduction? .....
- b A sale offers 50% off an item costing \$50. How much does the item now cost? .....
- c What is 10% of 100?.....

Skills	Not yet	Kind of	Got it
• Recognises, names and models tenths			
• Recognises, names and models hundredths			
• Compare and orders decimals to 3 decimal places			
• Links simple common fractions with decimals and percentages			
• Calculates simple percentages – 10%, 25% and 50%			